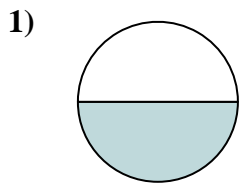


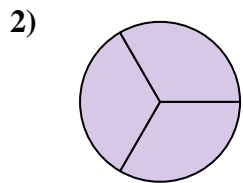


Determine which letter best describes the shaded portion.

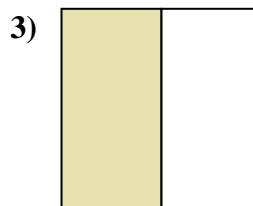
Answers



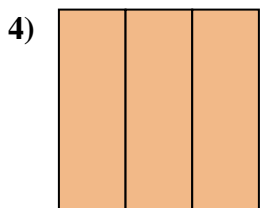
- A. one quarter
- B. two halves
- C. one half



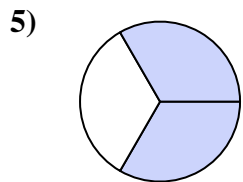
- A. three-thirds
- B. three quarters
- C. two-thirds



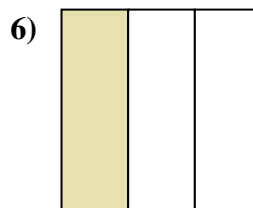
- A. two halves
- B. two-thirds
- C. one half



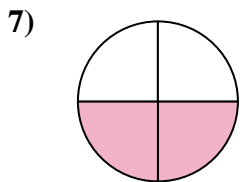
- A. one-third
- B. three-thirds
- C. three-fourths



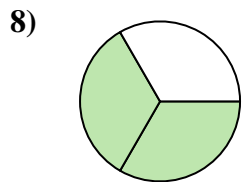
- A. four-fourths
- B. two-thirds
- C. one-third



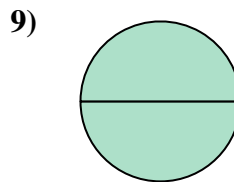
- A. one-third
- B. three-fourths
- C. four quarters



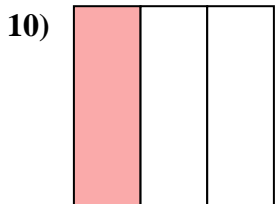
- A. two quarters
- B. one-third
- C. two-thirds



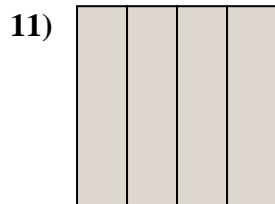
- A. one quarter
- B. one half
- C. two-thirds



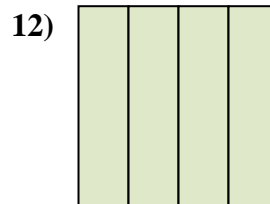
- A. two-thirds
- B. two halves
- C. one-third



- A. three-thirds
- B. one-third
- C. two halves



- A. one-third
- B. four-fourths
- C. three-fourths



- A. four-fourths
- B. three quarters
- C. one-fourth

1. _____

2. _____

3. _____

4. _____

5. _____

6. _____

7. _____

8. _____

9. _____

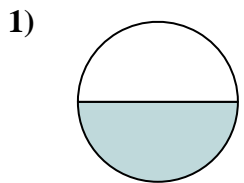
10. _____

11. _____

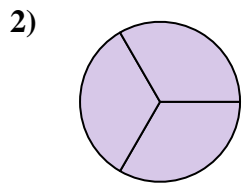
12. _____



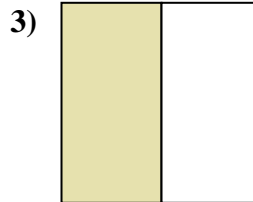
Determine which letter best describes the shaded portion.



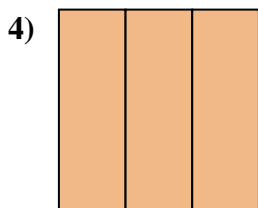
- A. one quarter
- B. two halves
- C. one half



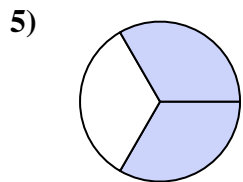
- A. three-thirds
- B. three quarters
- C. two-thirds



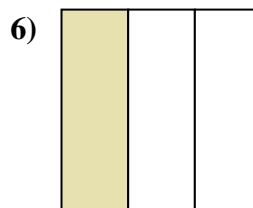
- A. two halves
- B. two-thirds
- C. one half



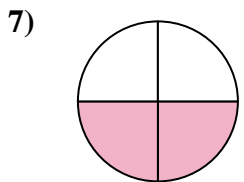
- A. one-third
- B. three-thirds
- C. three-fourths



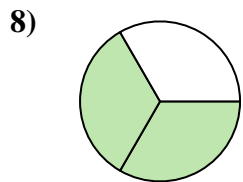
- A. four-fourths
- B. two-thirds
- C. one-third



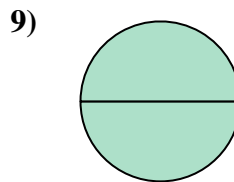
- A. one-third
- B. three-fourths
- C. four quarters



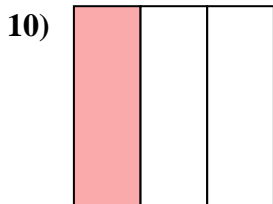
- A. two quarters
- B. one-third
- C. two-thirds



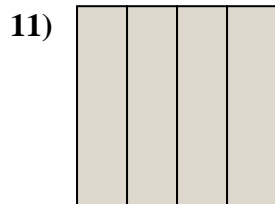
- A. one quarter
- B. one half
- C. two-thirds



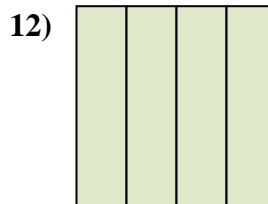
- A. two-thirds
- B. two halves
- C. one-third



- A. three-thirds
- B. one-third
- C. two halves



- A. one-third
- B. four-fourths
- C. three-fourths



- A. four-fourths
- B. three quarters
- C. one-fourth

Answers

- 1. **C**
- 2. **A**
- 3. **C**
- 4. **B**
- 5. **B**
- 6. **A**
- 7. **A**
- 8. **C**
- 9. **B**
- 10. **B**
- 11. **B**
- 12. **A**